

The

# Rook




Name: \_\_\_\_\_

## WORKSHEET


What squares can the white Rook move to?

f1, \_\_\_\_\_, \_\_\_\_\_, \_\_\_\_\_



What pieces can the white Rook take? Indicate

the squares: d2, \_\_\_\_\_, \_\_\_\_\_




What squares can the black Rook move to?

\_\_\_\_\_, \_\_\_\_\_, \_\_\_\_\_, \_\_\_\_\_

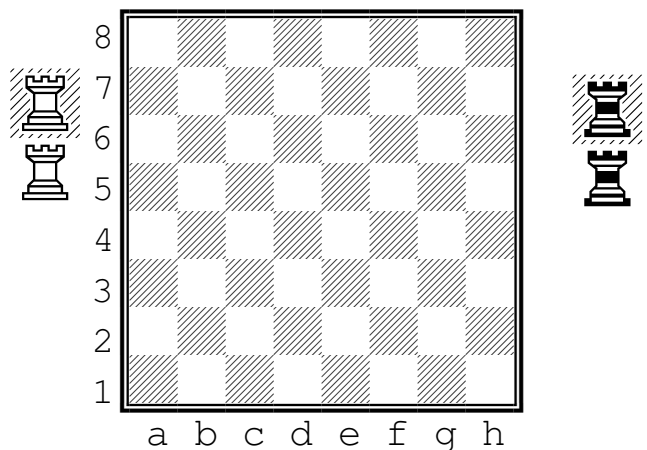
What pieces can the black Rook take? Indicate

the squares: \_\_\_\_\_, \_\_\_\_\_, \_\_\_\_\_

For the white rook to capture the black pawn, what squares would it move to? \_\_\_\_\_, \_\_\_\_\_



Indicate the starting positions of the white Rooks with an "R"



For the black rook to capture the white pawn, what squares would it move to? \_\_\_\_\_, \_\_\_\_\_

Indicate the starting positions of the black Rooks with an "X"